

# TARGET 3H

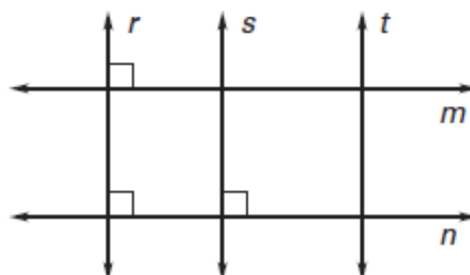
Name \_\_\_\_\_ Date \_\_\_\_\_

For #1-3, use the picture to answer the question.

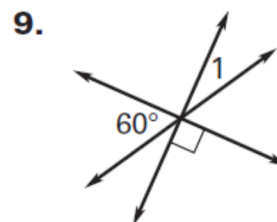
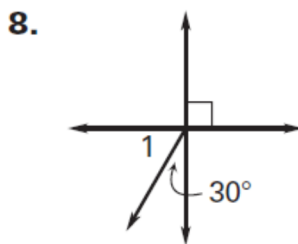
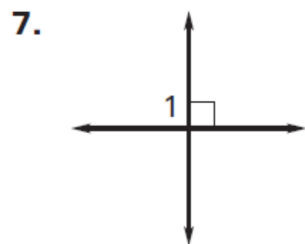
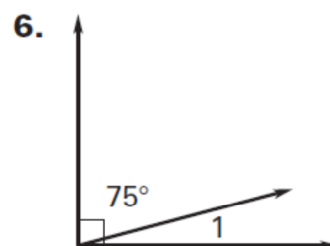
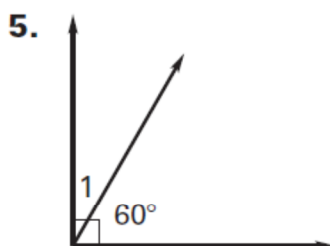
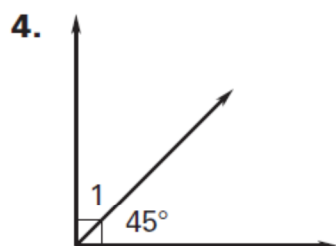
1. Is  $r \parallel s$ ?

2. Is  $m \parallel n$ ?

3. Is  $r \parallel t$ ?



Find  $m\angle 1$ .



Find the measure of the indicated angle.

10.  $\angle 1$

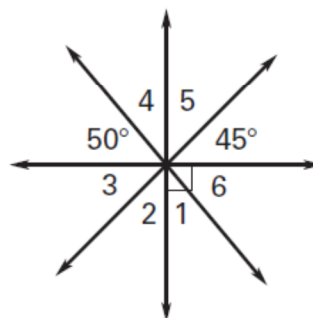
11.  $\angle 2$

12.  $\angle 3$

13.  $\angle 4$

14.  $\angle 5$

15.  $\angle 6$



## TARGET 3H ANSWERS

1. Yes
2. Yes
3. No
4.  $45^\circ$
5.  $30^\circ$
6.  $15^\circ$
7.  $90^\circ$
8.  $60^\circ$
9.  $30^\circ$
10.  $40^\circ$
11.  $45^\circ$
12.  $45^\circ$
13.  $40^\circ$
14.  $45^\circ$
15.  $50^\circ$